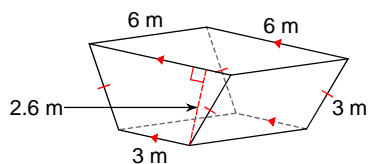




OBJEM A POVRCH HRANOLA - C

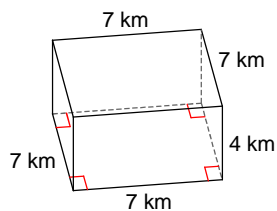
Vypo ítaj objem hranola!

1)



- A) 101.4 m^3 B) 70.2 m^3
 C) 43.3 m^3 D) 93.9 m^3

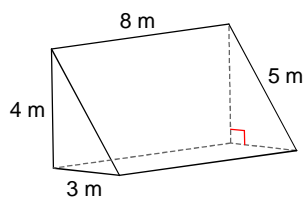
2)



- A) 196 km^3 B) 291 km^3
 C) 198 km^3 D) 275 km^3

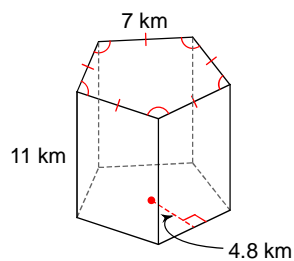
Vypo ítaj obsah pláš a hranola!

3)



- A) 77 m^2 B) 142 m^2
 C) 96 m^2 D) 48 m^2

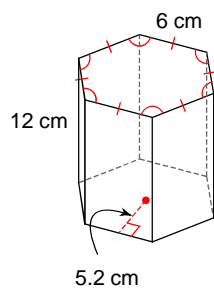
4)



- A) 385 km^2 B) 293 km^2
 C) 231 km^2 D) 298 km^2

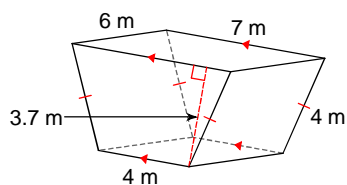
Vypo ítaj povrch hranola!

5)



- A) 919 cm^2 B) 702.8 cm^2
 C) 392.8 cm^2 D) 619.2 cm^2

6)



- A) 134.35 m^2 B) 201.3 m^2
 C) 140.6 m^2 D) 154.7 m^2

VÝSLEDKY - OBJEM A POVRCH HRANOLA - C



1) B
5) D

2) A
6) D

3) C

4) A