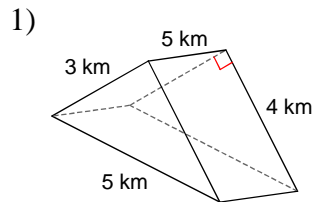
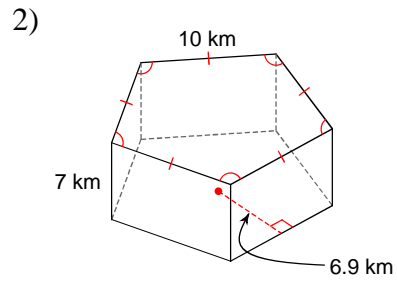


## OBJEM A POVRCH HRANOLA - D

**Vypo ítaj objem hranola!**

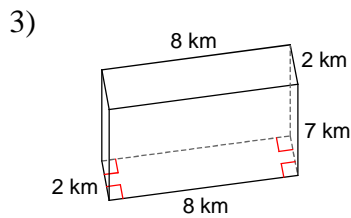


- A)  $38 \text{ km}^3$       B)  $18 \text{ km}^3$   
 C)  $30 \text{ km}^3$       D)  $24 \text{ km}^3$

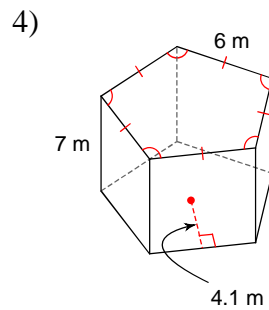


- A)  $1549.6 \text{ km}^3$       B)  $869.3 \text{ km}^3$   
 C)  $1207.5 \text{ km}^3$       D)  $241.5 \text{ km}^3$

**Vypo ítaj obsah pláň a hranola!**

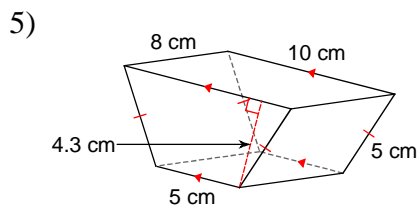


- A)  $140 \text{ km}^2$       B)  $105 \text{ km}^2$   
 C)  $98 \text{ km}^2$       D)  $143 \text{ km}^2$

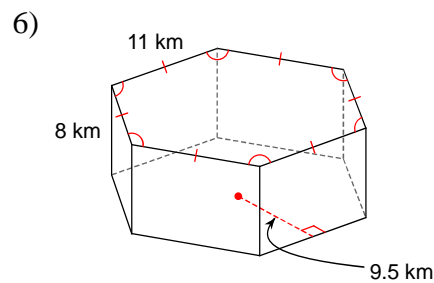


- A)  $312 \text{ m}^2$       B)  $210 \text{ m}^2$   
 C)  $214 \text{ m}^2$       D)  $180 \text{ m}^2$

**Vypo ítaj povrch hranola!**



- A)  $232.25 \text{ cm}^2$       B)  $287.3 \text{ cm}^2$   
 C)  $264.5 \text{ cm}^2$       D)  $368.1 \text{ cm}^2$



- A)  $1155 \text{ km}^2$       B)  $841.5 \text{ km}^2$   
 C)  $632.5 \text{ km}^2$       D)  $659 \text{ km}^2$

## Answers to OBJEM A POVRCH HRANOLA - D

1) C  
5) C

2) C  
6) A

3) A

4) B