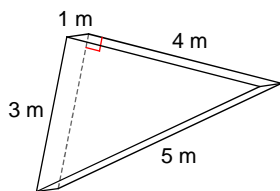




OBJEM HRANOLA - B

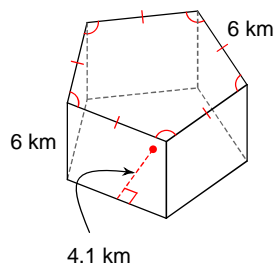
Aký je objem hranola?

1)



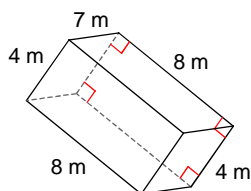
- A) 12 m^3 B) 6 m^3
 C) 4 m^3 D) 9 m^3

2)



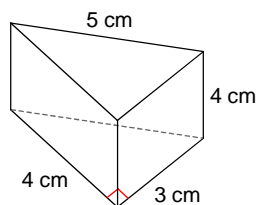
- A) 249 km^3 B) 444 km^3
 C) 369 km^3 D) 73.8 km^3

3)



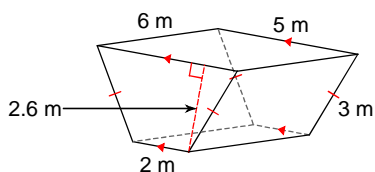
- A) 224 m^3 B) 126 m^3
 C) 162 m^3 D) 137 m^3

4)



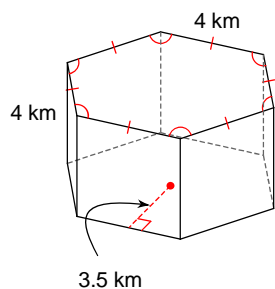
- A) 13 cm^3 B) 27 cm^3
 C) 21 cm^3 D) 24 cm^3

5)



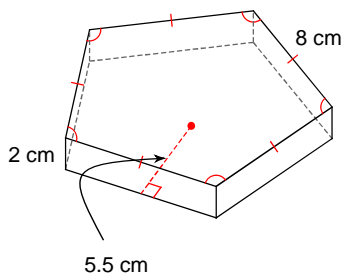
- A) 77.7 m^3 B) 34.8 m^3
 C) 62.6 m^3 D) 54.6 m^3

6)



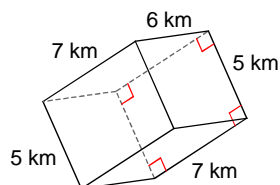
- A) 28 km^3 B) 120 km^3
 C) 252 km^3 D) 168 km^3

7)



- A) 231 cm^3 B) 44 cm^3
 C) 197 cm^3 D) 220 cm^3

8)



- A) 134 km^3 B) 199 km^3
 C) 210 km^3 D) 262 km^3

VÝSLEDKY - OBJEM HRANOLA - B

1) B
5) D

2) C
6) D

3) A
7) D

4) D
8) C

