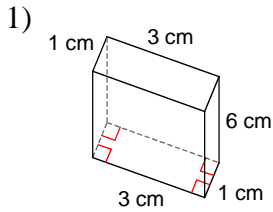
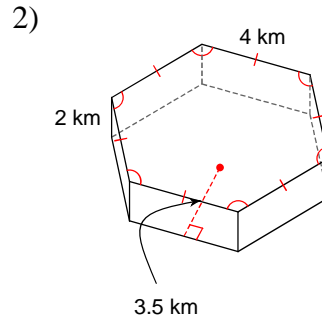


OBJEM HRANOLA - C

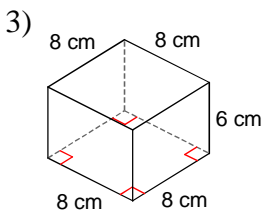
Aký je objem hranola?



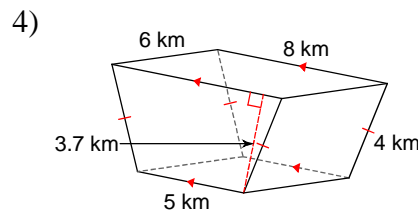
- A) 14 cm^3 B) 22 cm^3
 C) 18 cm^3 D) 10 cm^3



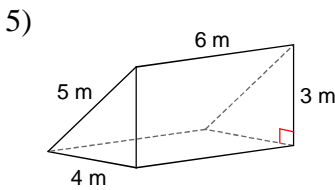
- A) 14 km^3 B) 81 km^3
 C) 84 km^3 D) 60 km^3



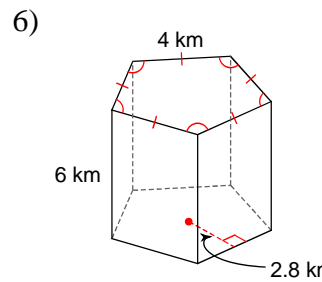
- A) 384 cm^3 B) 382 cm^3
 C) 326 cm^3 D) 539 cm^3



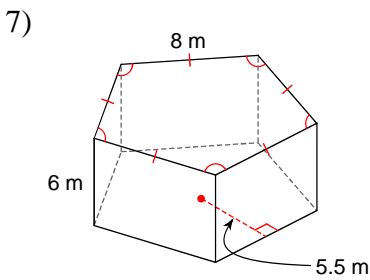
- A) 108.3 km^3 B) 129.1 km^3
 C) 144.3 km^3 D) 159.6 km^3



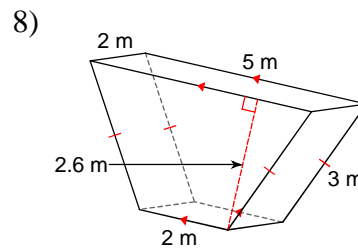
- A) 36 m^3 B) 29 m^3
 C) 52 m^3 D) 32 m^3



- A) 187 km^3 B) 93 km^3
 C) 168 km^3 D) 33.6 km^3



- A) 132 m^3 B) 420 m^3
 C) 660 m^3 D) 671 m^3



- A) 18.2 m^3 B) 20.7 m^3
 C) 24.7 m^3 D) 11.6 m^3

VÝSLEDKY - OBJEM HRANOLA - C

1) C
5) A

2) C
6) C

3) A
7) C

4) C
8) A

