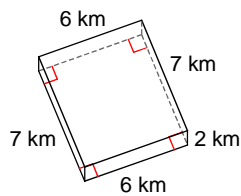


## POVRCH HRANOLA - C

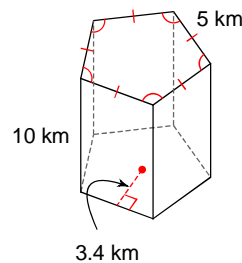
Aký je povrch hranola?

1)



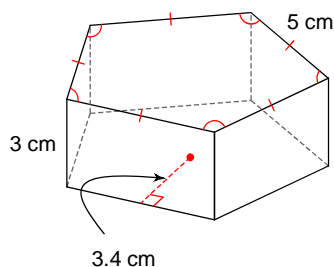
- A)  $155 \text{ km}^2$       B)  $94 \text{ km}^2$   
 C)  $136 \text{ km}^2$       D)  $128 \text{ km}^2$

2)



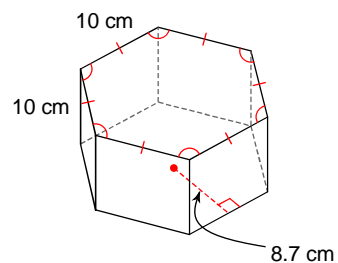
- A)  $258.5 \text{ km}^2$       B)  $292.5 \text{ km}^2$   
 C)  $335 \text{ km}^2$       D)  $267 \text{ km}^2$

3)



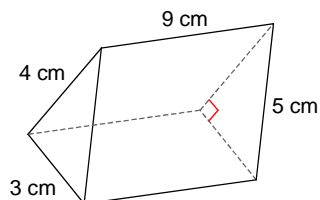
- A)  $160 \text{ cm}^2$       B)  $138 \text{ cm}^2$   
 C)  $117.5 \text{ cm}^2$       D)  $240 \text{ cm}^2$

4)



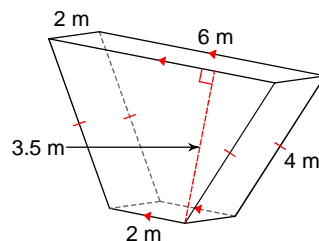
- A)  $643.5 \text{ cm}^2$       B)  $1122 \text{ cm}^2$   
 C)  $687 \text{ cm}^2$       D)  $863 \text{ cm}^2$

5)



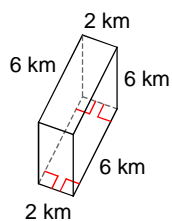
- A)  $167 \text{ cm}^2$       B)  $114 \text{ cm}^2$   
 C)  $131 \text{ cm}^2$       D)  $120 \text{ cm}^2$

6)



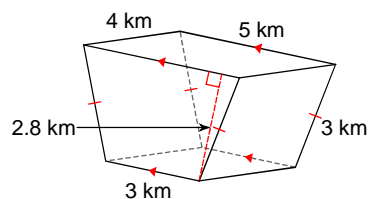
- A)  $60 \text{ m}^2$       B)  $79 \text{ m}^2$   
 C)  $33 \text{ m}^2$       D)  $46 \text{ m}^2$

7)



- A)  $108 \text{ km}^2$       B)  $151 \text{ km}^2$   
 C)  $135 \text{ km}^2$       D)  $120 \text{ km}^2$

8)



- A)  $67.2 \text{ km}^2$       B)  $66.9 \text{ km}^2$   
 C)  $78.4 \text{ km}^2$       D)  $97.6 \text{ km}^2$

# VÝSLEDKY - POVRCH HRANOLA - C

1) C  
5) D

2) C  
6) A

3) A  
7) D

4) B  
8) C

