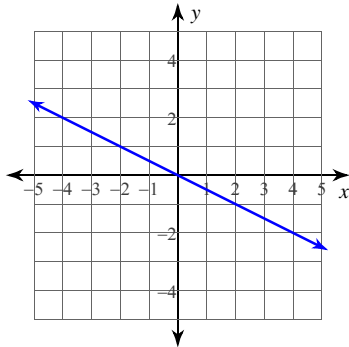




LINEÁRNA FUNKCIA - B

Vyber správnú rovnicu lineárnej funkcie na obrázku:

1)



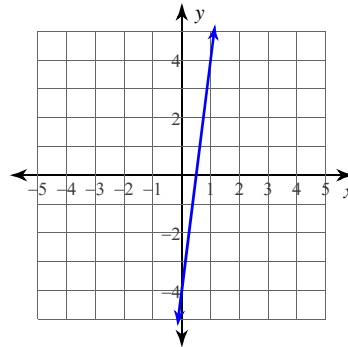
A) $y = -\frac{3}{2}$

B) $y = -\frac{1}{2}x$

C) $y = -\frac{1}{2}x - \frac{3}{4}$

D) $y = -\frac{3}{2}x$

2)



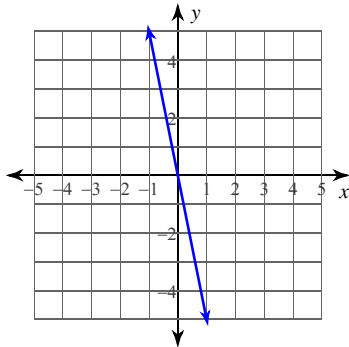
A) $y = 8x - 4$

B) $y = -4x - 4$

C) $y = -8x - 4$

D) $y = 2x - 4$

3)



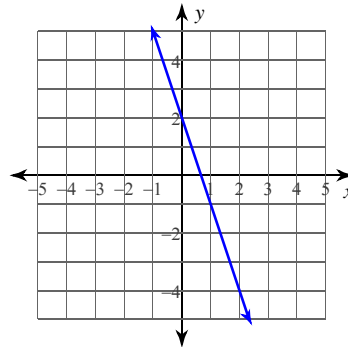
A) $x = -5$

B) $y = 5x$

C) $y = -5x$

D) $y = -5$

4)



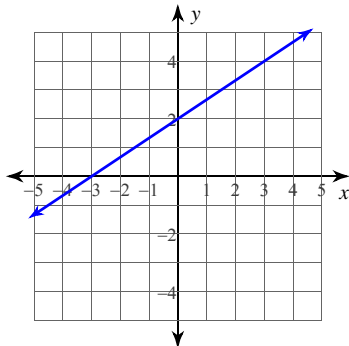
A) $y = -3x + 2$

B) $y = 3x + 2$

C) $y = -x + 2$

D) $y = x + 2$

5)



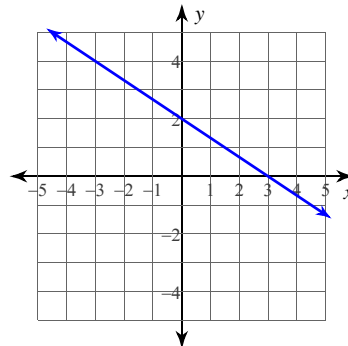
A) $y = \frac{2}{3}x + 2$

B) $y = -2x - 1$

C) $y = -x + 2$

D) $y = 2x - 1$

6)



A) $y = \frac{4}{3}x + 2$

B) $y = -\frac{2}{3}x + 2$

C) $y = -\frac{5}{3}x + 2$

D) $y = \frac{2}{3}x + 2$

VÝSLEDKY - LINEÁRNA FUNKCIA - B



1) B
5) A

2) A
6) B

3) C

4) A