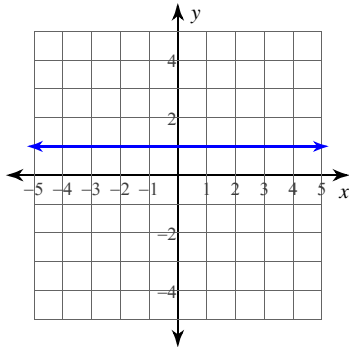




LINEÁRNA FUNKCIA - C

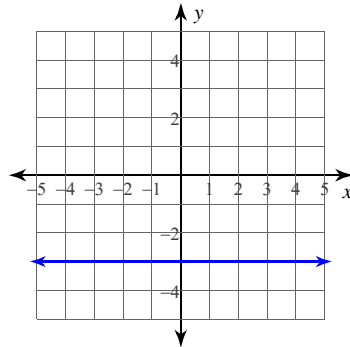
Vyber správnu rovnicu lineárnej funkcie na obrázku:

1)



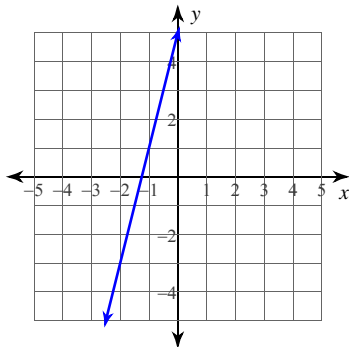
- A) $y = -x$ B) $x = 1$
 C) $y = -3x$ D) $y = 1$

2)



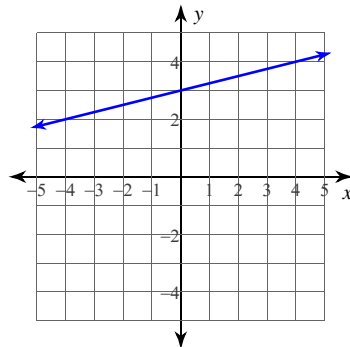
- A) $x = 1$ B) $y = -3$
 C) $y = -\frac{1}{3}$ D) $x = -1$

3)



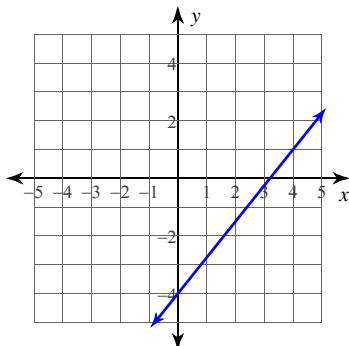
- A) $y = 5x + 4$ B) $y = -5x + 4$
 C) $y = -4x + 5$ D) $y = 4x + 5$

4)



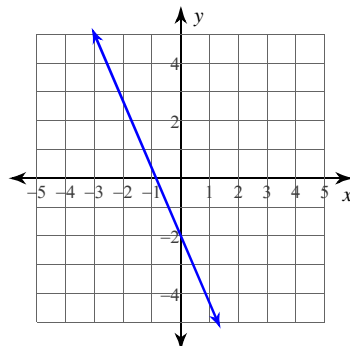
- A) $y = 3x - 1$ B) $y = -x + 3$
 C) $y = \frac{1}{4}x + 3$ D) $y = x + 3$

5)



- A) $y = \frac{5}{4}x - 4$
 B) $y = -4x + \frac{5}{4}$
 C) $y = -\frac{1}{4}x + \frac{5}{4}$
 D) $y = \frac{5}{4}x - \frac{1}{4}$

6)



- A) $y = -2x + \frac{4}{3}$
 B) $y = -\frac{7}{3}x - 2$
 C) $y = \frac{7}{3}x - 2$
 D) $y = \frac{4}{3}x - 2$

VÝSLEDKY - LINEÁRNA FUNKCIA - C



1) D
5) A

2) B
6) B

3) D

4) C